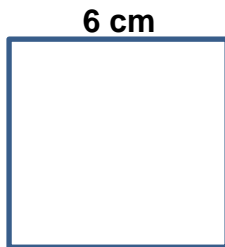


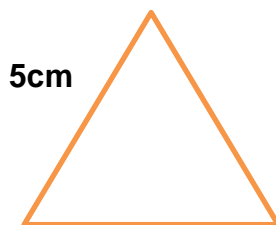
SOLUCIONES DE PERÍMETRO DE UN POLÍGONO REGULAR

1. Calcula el perímetro de los siguientes polígonos regulares:

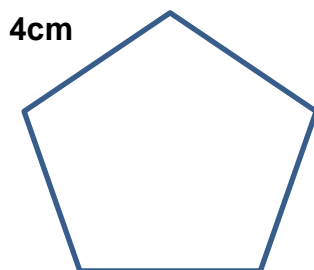


$$P = 6 + 6 + 6 + 6 = 24 \text{ cm}$$

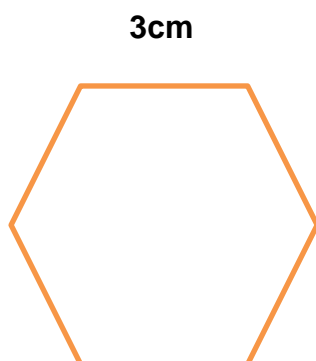
$$P = 6 \times 4 = \underline{24 \text{ cm}}$$



$$P = 5 \times 3 = \underline{15 \text{ cm}}$$



$$P = 4 \times 5 = \underline{20 \text{ cm}}$$



$$P = 3 \times 6 = \underline{18 \text{ cm}}$$